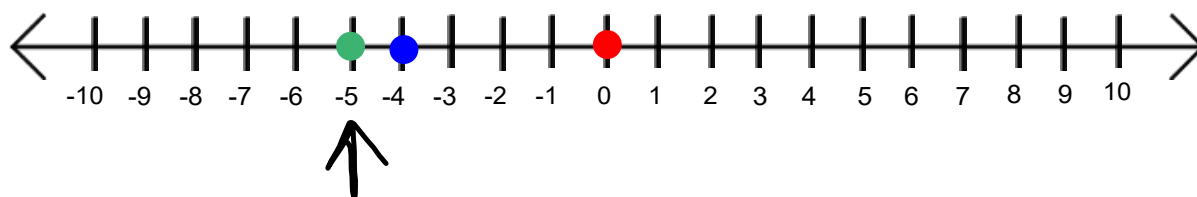


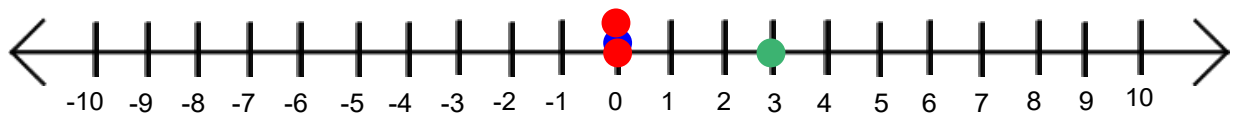
$$3) \underline{-4}, \underline{-1}$$

$$-4 + (-1) = -5$$



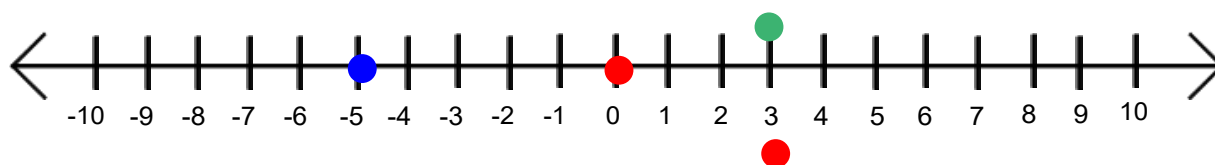
5) 3, -3

$$3 + (-3) = 0$$



14) -5, 8

$$-5 + 8 = 3$$



$$16) -7, -4$$

$$-7 + (-4) = -11$$

